


Name: \_\_\_\_\_ Date: \_\_\_\_\_

▶ Circle the picture.

Example



1.



2.



3.



4.



# Listening

Name: \_\_\_\_\_ Date: \_\_\_\_\_

▶ Listen to the story. Then, circle the correct answer.

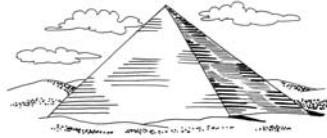
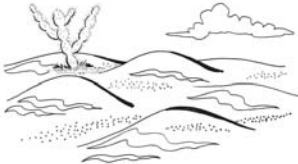
## Example



5.



6.



7.



Name: \_\_\_\_\_ Date: \_\_\_\_\_

▶ Circle the correct answer.

**Example**

a.            b.            c.            d.

8. a.

b.

c.

d.

9. a.

b.

c.

d.

# Reading

Name: \_\_\_\_\_ Date: \_\_\_\_\_

▶ Circle the word that completes the sentence.

## Example

The \_\_\_\_\_ is an imaginary line that runs around the center of Earth.

equator      latitude      hemisphere

1. The natural process of \_\_\_\_\_ is the movement of soil and small pieces of rock from one place to another.

longitude      erosion      eruption

2. We looked \_\_\_\_\_ the amazing sight of the Grand Canyon.

at      below      during

3. We sat \_\_\_\_\_ a window on the train.

with      through      beside

4. John and Maria \_\_\_\_\_ the train to visit their grandparents.

rides      ride      play

Name: \_\_\_\_\_ Date: \_\_\_\_\_

- ▶ Read the passage. Then, circle the correct answer.

The metric system and the U.S. customary system are two systems of measurement. The metric system is used in all of South and North America, except in the United States. The United States uses the U.S. customary system. The U.S. customary system uses miles to measure the distance between cities and towns. Shorter distances are measured in feet and yards. Small objects are measured in inches. The metric system uses kilometers to measure the distance between cities and towns. Small objects are measured in centimeters and millimeters. Wherever you are, it is important to know which system of measurement is used.

### Example

What is the passage about?

- a. The U.S. customary system and the metric system
- b. Miles and kilometers
- c. South America and North America
- d. Short distances and small objects

5. What unit of measurement does the U.S. customary system use to measure long distances?
- a. Meters
  - b. Miles
  - c. Inches
  - d. Feet

Name: \_\_\_\_\_ Date: \_\_\_\_\_

6. Where in North and South America is the metric system not used?
  - a. Mexico
  - b. Brazil
  - c. The United States
  - d. Canada
  
7. What U.S. customary system unit is used to measure small objects?
  - a. Inches
  - b. Pounds
  - c. Centimeters
  - d. Kilometer
  
8. Why is it important to know what system is used to measure distance wherever you are?
  - a. To know what time it is.
  - b. To know how far away a place is.
  - c. To know how much it costs to travel to a place.
  - d. To know what the temperature is at the place you are going to.
  
9. How is the metric system different from the U.S. customary system?
  - a. It is used to measure the sound of your voice.
  - b. It is used to measure weight and not length.
  - c. It is used to count objects.
  - d. It is used in most places in North and South America.

Name: \_\_\_\_\_ Date: \_\_\_\_\_

▶ Complete each sentence.

**Example**

I want to \_\_\_\_\_  
\_\_\_\_\_.

1. Maps are used to \_\_\_\_\_  
\_\_\_\_\_.
2. Someday I will take a trip to see \_\_\_\_\_  
\_\_\_\_\_.
3. In Tokyo you can \_\_\_\_\_  
\_\_\_\_\_.
4. You can use miles or kilometers to \_\_\_\_\_  
\_\_\_\_\_.

▶ Use the blank lines to write three paragraphs.

**Example.** Write three paragraphs about South America.

South America is a continent located in the Western Hemisphere. The Pacific Ocean borders the continent on the west. The Atlantic Ocean borders it on the east.

This continent has amazing scenery. The second-longest river in the world, the Amazon River, is located here. The world's largest rainforest, the Amazon Rainforest, is also found on this continent.

Many animals on this continent are not found anywhere else on Earth. These animals include llamas, anacondas, and piranhas. Every year, many people travel to visit this extraordinary continent.

# Writing

Name: \_\_\_\_\_ Date: \_\_\_\_\_

5. Write three paragraphs about any country in the world.

Paragraph 1 \_\_\_\_\_

---

---

---

---

Paragraph 2 \_\_\_\_\_

---

---

---

---

Paragraph 3 \_\_\_\_\_

---

---

---

---



Now close your booklet.

